




Describing relationships generally with variables and expressions

Date	Driving time (min)	Costs for actual driving time (€)	Total price as expression (€)	Total price calculated (€)
May, 16	20	20×0.15	$20 \times 0.15 + 1$	4.00
May, 19	12	12×0.15	$12 \times 0.15 + 1$	2.80
May, 24	27	27×0.15	$27 \times 0.15 + 1$	5.05
May, 25	18	18×0.15	$18 \times 0.15 + 1$	3.70
May, 29	33	33×0.15	$33 \times 0.15 + 1$	5.95
June, 2	42	42×0.15	$42 \times 0.15 + 1$	7.30
For every possible driving time:	X	$X \times 0.15$	$X \times 0.15 + 1$	



This material was designed by Stefan Korntreff, Susanne Prediger (and in the first tasks by Nadine Krägeloh and Tamsin Meaney) and can be used under the Creative Commons License BY-SA: Attribution - ShareAlike 4.0 International.

Citable as

Korntreff, Stefan & Prediger, Susanne (2022). Describing relationships generally with variables and expressions. Language-responsive instructional material for grades 7-10. Open Educational Resources, freely available at sima.dzlm.de/um/8-002.

Origin of the project

This language-responsive instructional material was developed as part of the projects MuM-Video (funded by the BMBF, grant no. 01JD2001A to Susanne Prediger and Mike Altieri) and FachBiss: BiSS-Transfer-Forschungsnetzwerk (funded by the BMBF, grant no. 01JI2001E to Susanne Prediger).

Related digital media

The material includes four instructional videos; their links included via QR code at the relevant place. Tasks labeled T1, T2 enhance conceptual understanding using spreadsheets, but can be skipped if necessary.

Image rights


All images are created by the authors or are credited.



A Describing changing images in general terms

1 More and more tables, more and more chairs

- a) The Özdemirs are a very hospitable family. No matter how many friends and relatives show up spontaneously, they always add tables and chairs. This goes on and on in the large garden.



- How many chairs do you need for 3 tables, for 4 tables?
- How many chairs do you need for 8 tables? How can you find out without drawing?
- How many chairs do you need for 42 tables? How can you find out without drawing?

Number of tables	1	2	3	4	5	6	7	8	...	42
Number of chairs	6									

- b) What does Merve mean by her claim?

How many chairs would you need for 17 tables?

Merve

2 at the ends and per table a set of 4 chairs.

- c) Write down a calculation for how to find the number of chairs, if you know the number of tables.

2 Another sitting arrangement

- a) Svetlana describes another arrangement of the tables at her parties.

- Draw the arrangement.

Each table seats 8 people, but the first table seats 2 less.

1 table, how many chairs?

2 tables, how many chairs?

3 tables, how many chairs?

- For small parties, there are only three tables. How many chairs are needed?
- For bigger parties there are 16, 17 or sometimes even 22 tables. How many chairs are then needed?

Number of tables	1					16	17	22	...	42
Number of chairs	6									


- b) Write down a calculation for how to find the number of chairs, if you know the number of tables. Such a calculation is called *expression*.

- c) How many chairs do you need for every possible number of tables? How can you describe this with an expression?



3 Describing calculations generally

- a) In the table, Pia wrote down her calculations for Task 1. Why does she use “ $\times 4$ ”? Can you add more expressions?



How many tables?	1	2	3	...	15	16	17	...	42	x
How many chairs?	$2 + 4$ $= 6$	$2 + 2 \times 4$ $= 10$	$2 + 3 \times 4$ $= 14$		$2 + 15 \times 4$				$2 + 42 \times 4$	

- b) What does Pia mean by x in the last column? What could be the expression for the variable x ?
- c) For Task 2 Pia has also started writing expressions in the table.
- Where does she use “ -2 ”? Why “ $\times 4$ ”? Show it in your drawing.

Each table seats 8 people, but the first table seats 2 less.

How many tables?	1	2	3		15	16	17	...	42	x
How many chairs?	$8 - 2$ $= 6$	$2 \times 8 - 2$ $= 14$	$3 \times 8 - 2$							

- d)
- Fill in the table.
 - Explain again, what does “every possible number of tables” mean?
 - What could be the expression for “every possible number of tables”?

4 Understanding expressions with x

- a) Pia wrote down an expression using the variable x again.
- Fill in the table by writing sample expressions with numbers instead of x . Therefore, x is called a *changeable number*.
 - Draw the seating arrangement that matches this expression.

Number of tables	1	2	3	4	...	15	16	...	42	x
Number of chairs										$2 \times x + 4$

- b) Now, try explaining the expression $2 \times x + 4$:
- In the expression, x is multiplied by 2. Where can you find the 2 in the table?
 - What does the x mean in the expression? Could you express it in another way?
 - What can you calculate with the expression? Explain by using the table.



B Describing situations generally using changeable numbers

7 Describing the costs of riding an e-scooter

Lately Till has been renting e-scooters every now and then.
The following table shows how long he drove and what he paid.
The offer that Till uses is on the right.



- a)
- Fill in the missing values in Till's table.
You can choose **any** driving time for June 2nd.
 - Write down headings for the columns.
 - Complete the last row.

Service price

E-Scooter: 0.15 € per minute and
1 € for unlocking
Standard tariff (0.15€/min) is charged
when you unlock the scooter
through the app.



Date	Driving time (min)			
May 16 th	20	20×0.15	$20 \times 0.15 + 1$	4.00
May 19 th	12	12×0.15	$12 \times 0.15 + 1$	
May 24 th	27	$\times 0.15$	$+ 1$	
May 25 th	18			
May 29 th		33×0.15		
June 2 nd				
Every possible driving time:				

- b) Explain using your own words:

- What does the expression in the **highlighted cell** of the last row stand for?
What can you calculate with it?
- What does "every possible driving time" mean to you?
- Why is the expression in the **highlighted cell** correct for every possible driving time?
- Why does Till have to multiply in the expression 20×0.15 on May 16th ?



The expression stands for:

"Every possible driving time" means:

This is why my expression is correct for "every possible driving time":

This is why Till has to multiply in 20×0.15 :



8 Costs of riding an e-scooter – Describing changing numbers with variables

Preparing for the video:



- a) Compare your results from Task 7. Did you have difficulties with anything?
Do you have a question? Write down your questions here:

-
-
-

Working with the video:



- b) Check your answers to Task 7 against the video.
Complete the following sentences. Choose one of the options in **bold**.

Video 1:



<https://educational-media.de/mum-video/interaktiv/watch/17>



"Costs for actual driving time (€)" / "**x minute price (€)**" is a better heading for the 3rd column than "Costs for actual driving time (€)" / "**x minute price (€)**", because...

"A variable is a specific number that you can choose" is **correct** / **is not correct**, because...

"The expression $x \times 0.15 + 1$ describes the variable driving time" is **correct** / **is not correct**, because...

After the video:



- c) Are your responses to Task 7 correct? Correct, if necessary ...
- ...the entries in the table (headings, last row),
 - .. your explanations in 7b).

- d) Have your questions from 8a) regarding Task 7 been answered?
Write down the answers here:



Answers to our questions regarding Task 7:



9 Costs of riding an e-scooter – Understanding general expressions

- a) Pascal and Miriam made some mistakes when filling in the table. Explain to them what went wrong.

Service price

E-Scooter: 0.15 € per minute and 1 € for unlocking

Pascal

Driving time + minute price, because 0.15 are new in the column.

Need help with the answer for Pascal?

Watch the video again from minute 1:15

Miriam

I always write down which quantity is new in the heading, so "+ unlock costs".

Pascal, this is wrong because ...

Miriam, that is not completely wrong. But it is better if ...

Because...

Date	Driving time	Driving time + price per minute (€)	+ Costs for unlocking (€)	Total price calculated (€)
May 16 th	20	20×0.15	$20 \times 0.15 + 1$	4.00
May 19 th	12	12×0.15	$12 \times 0.15 + 1$	2.80
May 24 th	27	27×0.15	$27 \times 0.15 + 1$	5.05
May 25 th	18	18×0.15	$18 \times 0.15 + 1$	3.70
May 29 th	33	33×0.15	$33 \times 0.15 + 1$	5.95
For every possible driving time:	100	100×0.15	$100 \times 0.15 + 1$	16.00



Pascal

Every possible number means that I can choose a specific number. I simply choose 100.

Need help with the answer for Pascal?

Watch the video again from minute 4:35

Pascal, this is wrong because ...

- b) Answer the questions posed by Farid and Yasmin:

Yasmin

The general total costs $x \times 0.15 + 1$ are with x . With this x , it is not possible to calculate something. What is the point of writing this down?

Need help with the answer for Yasmin?

Watch the video again from minute 5:10

Answer to Yasmin:

Farid

Why is the expression $x \times 0.15 + 1$ **always** correct? We only tried 5 driving times. With a driving time of 1042 minutes, can't it be completely different?

Answer to Farid:



T1 Describing situations generally using spreadsheet

In Till's spreadsheet, the same is calculated over and over again. Spreads can help with this.

Spreadsheets are in a computer program. You can use them to calculate within tables automatically.



a) Get an overview of working with spreadsheets in the video.



b) Transfer Till's table to the file online. The pictures will help you.

Writing a formula referencing cell B2:

	A	B	C	D
1	Day	Driving time in min	Costs for actual driving time	Total costs (including unlocking)
2	May 16th	20	=B2*0,15	
3	May 19th	12		

Transferring a formula in the bottom right corner to another row:

	A	B	C	D
1	Day	Driving time in min	Costs for actual driving time	Total costs (including unlocking)
2	May 16th	20	3.00 €	4.00 €
3	May 19th	12	1.80 €	
4	May 24th	17	2.55 €	



c) Note down formulas that will help Till calculate using the spreadsheet:

- Formulas to calculate the cost for the actual driving time on May 19th.
- Formulas to calculate the total cost for his ride on May 24th.

d) Compute using the spreadsheet:

What would Till have to pay for 123.456.789 min driving time?

e) Nathan puts this expression into cell C2:

$$= B*0,15$$

But the spreadsheet can not work with this input.

Explain:

- What is wrong with the input = $B*0,15$?
- What was Nathan presumably trying to express with his input = $B*0,15$? Why is that input actually a *very good idea*?

Video 2 Spreadsheet:



<https://sima.dzlm.de/filme/sima-8-002-erklervideo-2-veraenderliche>

Excel-file:



https://sima.dzlm.de/sites/simams/files/uploads/sima8-002-variable-terme_material_t1_excel_230814.xlsx

	A	B	C	D
1	Day	Driving time in min	Costs for actual driving time	Total costs (including unlocking)
2	May 16th	20	=B*0.15	
3	May 19th	12		

	A	B	C	D
1	Day	Driving time in min	Costs for actual driving time	Total costs (including unlocking)
2	May 16th	20	#NAME?	
3	May 19th	12		



10 How much is a taxi ride? – Building complex expressions step by step

Mary: There are many different costs riding taxis.

Till: And some costs are almost always different.

Pia: Can the total costs still be described generally somehow?

Taxi offer

- Basic fee 2.00 €
- Price per kilometer 1.75 € / km
- Price per minute spent waiting (e.g. headlights, traffic jam, ...) 0.85 € / min
- Tip optional



- a) Discuss: Which quantities are the same for every ride? Which are usually different? Which changing quantities does the final price depend on?



- b) Mary is constructing the expression for the costs of the taxi ride for example numbers first and then puts the expression together step by step. Explain her approach and fill in the gaps.

Mary: I'll start with an example.

1. Writing down changing quantities and choosing example values for the quantities:

Variable value	Specific example
• Number of kilometers	e.g., 5 km
•	
•	
•	

2. Building the expression step by step with helpful questions in between:

	Question	Expression	Add or multiply? Why?
(1)	How much do I pay for the driven kilometers?	5×1.75 ↓	Times, because I'm riding for 5 kilometers. For every kilometer I have to pay 1.75€, so 5 times the kilometer price, which is 5 times 1.75€.
(2)	How much do I pay for waiting time?	↓	
(3)	How much do I tip and how much basic fee do I pay?	↓	
(4)		$5 \times 1,75 +$ $+ 2.00$	



- c) What does Pia mean? Explain. How can all possible taxi rides be described?

Mary's expression in step 4 doesn't yet describe all possible taxi rides!



My idea for describing all possible taxi rides:



11 How much is a taxi ride? – Explaining why general expressions are always correct



a) Till is trying to find the general expression for the Taxi offer in Task 10 by using a table.

- Write headings for each column.
- Complete Till's table.

Till

A table helps me keep the overview. I need more examples. Then I can see which quantities change and which stay the same.

Changing quantities			Complicated parts of the expression			Total price as an expression (in €)
(in km)	(in min)	(in €)				
20	3	5.00	2.00	20×1.75	3×0.85	
1		2.50	2.00		0×0.85	
	2	0.50		$13 \times$		
4	7	3.00				
For every possible taxi ride:						

b) Explain for the last row in Till's table: Why is the total price *variable*?

How can we see this in the expression for the total price?



c) What problem does Pia have?

Explain her question in your own words.

Why is the expression $x \times 1.75$ for the cost of the driven kilometers always correct? Till has only looked at 4 examples! What about all the other numbers of kilometers? Is the expression $x \times 1.75$ even correct for them? Why?

Pia

d) How would you respond to Pia?



Dear Pia,
the expression also fits for other numbers of kilometers because ...

Helpful phrases for your answer:

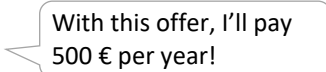
- "For every kilometer you have to pay ..."
- "The number of kilometers tells you how many times you have to pay the kilometer price."
- "The variable x stands for..."
- "No matter which number of kilometers you choose, ..."
- "So you have to pay the kilometer price ... times. That is ... times 1.75."

e) Explain also why the expression $y \times 0.85$ for the waiting costs is *always* correct.



12 How much costs the e-scooter annually? – Building complex terms independently

Yasmin wants to know how much an e-scooter costs annually.

Yasmin  With this offer, I'll pay 500 € per year!

Another E-Scooter Offer

E-scooter: 0.10 € per minute and 1.50 € for unlocking

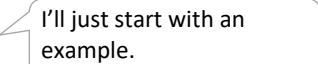


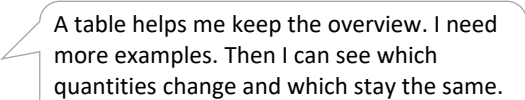
a) Vote whether Yasmin is right or not.



b) Build an expression for the e-scooter costs for a whole year.

Hint: Build the expression with example numbers first, like Mary in **Task 10b**, and generalize it afterwards with a table for many examples like Till in **Task 11**.

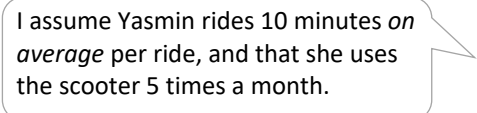
Mary  I'll just start with an example.

Till  A table helps me keep the overview. I need more examples. Then I can see which quantities change and which stay the same.

Steps that help with building general expressions

Building an example expression like Mary in Task 10b

- note changing quantities values and choose specific values
- build the expression step by step using helpful questions in between (Remember explaining why you use + or ×.)
- Finally, note down an expression for *every possible number* – for this, Till's approach might help:

 I assume Yasmin rides 10 minutes *on average* per ride, and that she uses the scooter 5 times a month.

Building a table like Till in Task 11

- build a table: each changing quantities value gets a column, complicated part of the expression too
- fill in different examples into your table
- in the last row, describe everything for *every possible number*

Final check:

- Is your general expression (in the last row of the table) actually *always* correct? Why?



T2 How much is the e-scooter annually? – General calculations using spreadsheet



- a) Transfer the table from 12b into a spreadsheet program.
The pictures remind you how the program can do calculations for you:

Writing a formula referencing cell B2:

	A	B	C	D
1	Day	Driving time in min	Costs for actual driving time	Total costs (including unlocking)
2	May 16th	20	=B2*0,15	
3	May 19th	12		

Transferring a formula in the bottom right corner to another row:

	A	B	C	D
1	Day	Driving time in min	Costs for actual driving time	Total costs (including unlocking)
2	May 16th	20	3.00 €	4.00 €
3	May 19th	12	1.80 €	
4	May 24th	17	2.55 €	



- b) Investigate the following problem using the spreadsheet program:
On average, Yasmin drives for 5 min (10, 15, 20, 25 min) after unlocking.
- How many rides a month does it take for Yasmin to pay more than 500€ in a whole year?
 - You can write your solutions down in the table.

Solution	Average driving time after unlocking (in min)	Total costs in a whole year (above 500 €?)
	5	
	10	
	15	
	20	
	25	

- c) Yasmin wants to pay **less** than 500€ in a year and her rides are on average 20 minutes long. How many rides can Yasmin afford each month?
Phrase your answer in 2 different ways. (The hint below may help.)



Your thoughts:

Hint: The ideas might be expressed like this:

- She can ride 4 times or more/less
- She has to stay above/below 4 rides
- She can only ride more/less than 4 times

- d) Investigate the following problem using a spreadsheet:
Yasmin wants to pay less than 500€ per year and wants to ride about 15 times a month.



How long can her monthly rides be on average?

13 Filling knowledge store of Unit B



Complete knowledge store of Unit B by

- (1) filling in the table,
- (2) explaining the expression $1.5 + x \times 0.8$,
- (3) explaining “every possible number”,
- (4) choosing what variables can be used for.



Knowledge Store B: Expressions with variables for changing numbers

If some numbers can change in calculations, the calculations can be written down using general expressions. In tables you can see *which numbers change* and *which remain the same*.

Example: Amir is training for a marathon. During training, he warms up first. Then, he runs a couple of big or small laps in the park.

Warmup	1.5 km
Big lap	0.8 km
Small lap	0.4 km

Changable numbers		Complicated parts of the expression			Total distance in one training (in km)
		1.5			
		1.5			
For every possible training course:					
x	y		$x \times 0,8$		

How to explain what an expression term including variables means:

Explain 3 questions:

1. What do the variables stand for?
2. Why did you choose these operations?
3. What exactly does the expression describe?

Example: $1.5 + x \times 0,8$

The variable x stands for ...

For $x \times 0.8$ I am using \times , because ...

For $1.5 + x \times 0.8$ I am using $+$, because ...

The expression $1.5 + x \times 0.8$ describes ...

What “ x stands for every possible number” means:

If x stands for a changeable number, you say x represents every possible number.

How to explain what “every possible number” means:

This is why variables as changeable numbers are useful:

(cross out what does not fit)

With variables, you can describe relationships such as training courses, transportation fees or total costs in general ways.

With variables, you don't need to calculate anything at all.


With variables, you can show what numbers change in an expression.

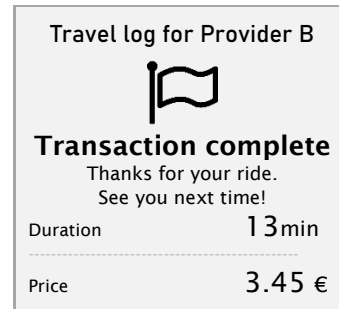
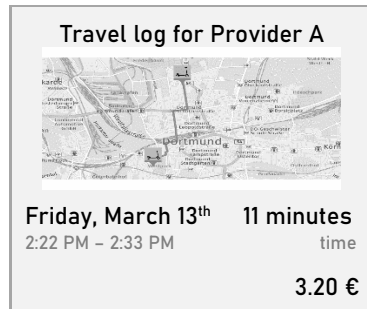
Your explanation:



C Determining unknown quantities

14 Setting up equations with unknown quantities and explaining them

-  a) Maya has used many providers of e-scooters. She is comparing her travel logs. Which provider should she keep on using? Discuss your first ideas.



- b) Now take a closer look: Maya remembers that Provider A has an unlocking fee of 1€. Can you find out what it costs to ride one minute after unlocking? Try examples.



- c) Maya wants to know the driving fee per minute (**minute price**) of Provider A. To find out, she writes down an equation: $m \times 11 + 1.00 = 3.20$. Explain what Maya's equation means:



1. The expression / number on the right side of the = stands for ...
2. The m in Maya's equation stands for ...
3. The expression on the left of the = stands for ...
4. You put an equal sign "=" between the expressions to express that ...

- d) Provider B charges 0.20€ for unlocking. Write down a matching equation and explain what it means. Use the beginnings from c).



Equation:

- 1.
- 2.
- 3.
- 4.



15 Finding unknown values

Till: From this equation, we somehow have to find the unknown number.

Amir: I am going backwards in the arrow diagram

Maya: I use equations. Is this also possible?



a) Amir sketches how he builds the expression in a drawing and then tries to go backwards.

- Watch the video to see how he thinks.
- Finish his calculation.

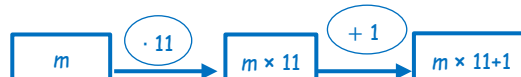
Video 3:



<https://sima.dzlm.de/filme/sima-8-002-erklaervideo-3-rueckwaertsrechnen-unbekannte>

Amir's arrow diagram:

Building the expression:



Calculating backwards:



b) Maya tries to find simpler equations that express the same as Amir's arrow diagram.

- How did Maya get the simpler equation $m \times 11 = 2.20$?
- How can she be sure that this equation $m \times 11 = 2.20$ is describing the same unknown value as $m \times 11 + 1.00 = 3.20$? Argue using the e-scooter offer.

Maya's simpler equations:

$$m \times 11 + 1,00 = 3.20$$

$$m \times 11 = 2.20$$

$$m =$$



c) Explain: How do Maya's and Amir's equations fit together?

Where can you find Maya's equations, e.g. $m \times 11 = 2.20$, in Amir's arrow diagram?

d) Answer Till's question.

Till: Why do you have to divide by 11 in the last step?

Maja: Let's think about what we distribute equally between the 11



e) Calculate like Maya and Amir for **Provider B** (unlocking fee 0.20€). Draw an arrow diagram.



Maja's simpler equations:

$$= 3.45$$

$$=$$

$$m =$$

Amir's arrow diagram and calculating backwards:



16 Comparing two offers



Maja

Now I know what each provider costs.
But I still don't know which is the better offer.

What do we know?

Till

- a) Collect the information on the offers of Provider A and B from **Task 14** and **15**. Can you find expressions to describe the final price for every possible number of minutes driven?



Offer provider A:

Unlocking fee:

Price per minute:

Expression for final price for every possible number of minutes:

Offer provider B:

Unlocking fee:

Price per minute:

Expression for final price for every possible number of minutes:

- b) Calculate in your workbook for providers A and B:
- How much does Maja pay for 10 minutes (20 minutes) of driving?
 - How long can Maja ride with 3.20€ (4.20€, 5.00€)
You can use an arrow diagram or simpler equations.



Results for Provider A

Results for Provider B



- c) Discuss again and then write it down: Which offer is better under which conditions?



17 Filling the knowledge store of Unit C



Complete the knowledge Storage of **Unit C** by ...

- a) ... explaining the meaning of the equation $(1,75 \times x + 3,90) \times 2 = 49,80$;
- b) ... solving the equation $(1,75 \times x + 3,90) \times 2 = 49,80$ using arrow diagrams or simpler equations;
- c) ... explaining what variables standing for unknown numbers can be used for.



Knowledge store C: Equations with variables for unknown numbers

Sometimes you're looking for unknown numbers that meet certain criteria. This search can be expressed using equations.

Example: Someone wants to go the same route back and forth by taxi. The following prices are charged:

Basic fee	3.90 €
Price per kilometre	1.75 €

How to explain what an equation with variables means in 4 steps:

Example: $(1.75 \times x + 3.90) \times 2 = 49.80$

1. The expression/number on the right side of the = stands for ...

2. The x stands for...

3. The expression on the left side of the = stands for ...

You use the operation ... because ...

4. You put an equal sign = between two expression to express that

How to find unknown numbers by calculating backwards

Arrow diagram:

1. Translate the task into an arrow diagram:



2. Calculate backwards:



3. Write down the result and check it.

Looking for simpler equations

Find x so that

$$(1.75 \times x + 3.90) \times 2 = 49.80$$

=

=

$x =$

The unknown number is:

Check:

This is why variables as unknown numbers are useful

(cross out what doesn't fit)

The variable always represents all numbers.

The number that I don't know yet, I can write as the unknown x .

Using variables, you can put questions into equations.

For example: $(1.75 \times x + 3.90) \times 2 = 49.80$ is expressing a question.

Your explanation:



D Distinguishing uses of variables

18 Comparing varying or unknown driving times

E-scooter: 0.15 € per minute and 1 € for unlocking

Till

In my expression $0.15 \times x + 1$ the x is really variable because it represents a changeable driving time. And the expression is variable too, so I write $y = 0.15 \times x + 1$.

Strange, in the equation $0.15 \times x + 1 = 3.10$, x is not variable anymore but fixed.

Maya

- a) Explain in your own words what Till and Maya are trying to say.

Video 4:



<https://sima.dzlm.de/filme/sima-8-002-erklervideo-4-verwendungsweisen-von-variablen>



- b) Use the video to check your explanation.



- c) Fill out the overview in the **Knowledge Storage of Unit D**.

To do so, cut out the texts, match them to the correct use of the variable, and complete the texts if necessary.

- d) Josef

I don't get the difference between variable as changing quantities and as unknowns! For $y = 0.15 \times x + 1$ I don't know the x either. So why is it changeable and not unknown?



Help Josef to understand the difference.

- Explain using the table: Why is the x in $y = 0.15 \times x + 1$ changeable?
- What would need to change so that x describes an unknown number? Explain why x is then an unknown.

Date	Driving time (min)	Costs actual driving time (€)	Total price as expression (€)
May, 16	20	20×0.15	$20 \times 0.15 + 1$
May, 19	12	12×0.15	$12 \times 0.15 + 1$
May, 24	27	27×0.15	$27 \times 0.15 + 1$
May, 25	18	18×0.15	$18 \times 0.15 + 1$
May, 29	33	33×0.15	$33 \times 0.15 + 1$
June, 2	100	100×0.15	$100 \times 0.15 + 1$
For every arbitrary driving time	x	$x \times 0.15$	$x \times 0.15 + 1$

Dear Josef,



Material for Task 18c: Texts to cut out for the Knowledge Store of Unit D

$$x \times 0.15 + 1 = 3.10$$

The question mark fits the variable as _____,
because ...

Situation: Taxi

$$y = 4 + 1.5 \times x + 2.5$$

Situation: Taxi

$$4 + 1.5 \times x + 2.5 = 13$$

You can plug in numbers into the variable, but no specific number is searched.

It can appear in expressions.

It's not about finding a hidden number but describing a relationship generally.

The number is represented by letters.

You can write calculations for all possible numbers with it.

1 × 0.15 + 1	21 × 0.15 + 1	41 × 0.15 + 1	61 × 0.15 + 1	81 × 0.15 + 1
2 × 0.15 + 1	22 × 0.15 + 1	42 × 0.15 + 1	62 × 0.15 + 1	82 × 0.15 + 1
3 × 0.15 + 1	23 × 0.15 + 1	43 × 0.15 + 1	63 × 0.15 + 1	83 × 0.15 + 1
4 × 0.15 + 1	24 × 0.15 + 1	44 × 0.15 + 1	64 × 0.15 + 1	84 × 0.15 + 1
5 × 0.15 + 1	25 × 0.15 + 1	45 × 0.15 + 1	65 × 0.15 + 1	85 × 0.15 + 1
6 × 0.15 + 1	26 × 0.15 + 1	46 × 0.15 + 1	66 × 0.15 + 1	86 × 0.15 + 1
7 × 0.15 + 1	27 × 0.15 + 1	47 × 0.15 + 1	67 × 0.15 + 1	87 × 0.15 + 1
8 × 0.15 + 1	28 × 0.15 + 1	48 × 0.15 + 1	68 × 0.15 + 1	88 × 0.15 + 1
9 × 0.15 + 1	29 × 0.15 + 1	49 × 0.15 + 1	69 × 0.15 + 1	89 × 0.15 + 1
10 × 0.15 + 1	30 × 0.15 + 1	50 × 0.15 + 1	70 × 0.15 + 1	90 × 0.15 + 1
11 × 0.15 + 1	31 × 0.15 + 1	51 × 0.15 + 1	71 × 0.15 + 1	91 × 0.15 + 1
12 × 0.15 + 1	32 × 0.15 + 1	52 × 0.15 + 1	72 × 0.15 + 1	92 × 0.15 + 1
13 × 0.15 + 1	33 × 0.15 + 1	53 × 0.15 + 1	73 × 0.15 + 1	93 × 0.15 + 1
14 × 0.15 + 1	34 × 0.15 + 1	54 × 0.15 + 1	74 × 0.15 + 1	94 × 0.15 + 1
15 × 0.15 + 1	35 × 0.15 + 1	55 × 0.15 + 1	75 × 0.15 + 1	95 × 0.15 + 1
16 × 0.15 + 1	36 × 0.15 + 1	56 × 0.15 + 1	76 × 0.15 + 1	96 × 0.15 + 1
17 × 0.15 + 1	37 × 0.15 + 1	57 × 0.15 + 1	77 × 0.15 + 1	97 × 0.15 + 1
18 × 0.15 + 1	38 × 0.15 + 1	58 × 0.15 + 1	78 × 0.15 + 1	98 × 0.15 + 1
19 × 0.15 + 1	39 × 0.15 + 1	59 × 0.15 + 1	79 × 0.15 + 1	99 × 0.15 + 1
20 × 0.15 + 1	40 × 0.15 + 1	60 × 0.15 + 1	80 × 0.15 + 1	100 × 0.15 + 1

$$x \times 0.15 + 1$$

The image matches the variable as _____,
because ...

Task for a situation: Lara's training

Lara runs a different amount of laps every day. She doesn't want to always think about how many kilometers she ran. That's why Lara wants to find an expression for the complete distance.

Question: What is the expression?

Answer:

Task for a situation: Lara's training

Today, Lara's training schedule tells her to run 4.7 kilometers in total. Now Lara wants to know ...

Question:

Answer:



19 Changeable quantities or unknown numbers in different situations

- a) Use the example to explain what Maya has observed:

E-scooter: 0.10 € per minute and
1 € for unlocking

For every driving time, you can describe the total price as follows: $y = 0.10 \times x + 1$.

How long will I drive if I pay 2.30 €?

$$0.10 \times x + 1 = 2.30$$

$$0.10 \times x = 1.30$$

$$x = 13$$

Whether x describes all possible numbers or only an unknown number can change from one step to the next!

Maja



- b) For every variable in the boxes, imagine

- a situation and an equation in which the variable is a *changeable quantity*.
- a situation and an equation in which the variable is an *unknown number*.

Explain for your story why it is helpful to use a variable.

n is an amount of students

Idea: Entrance to a museum with teachers

t is a number of minutes

Idea: International calls with basic fee

